


Blizzard Bag!

Dear Parents,

As we near colder weather there is always a chance of school being cancelled due to inclement climate conditions. In the event of a 'Snow Day', your child will be asked to complete some of the work contained in this packet.

The work will need to be completed and returned to your child's teacher the next day school is in session.

Thank you!





Word Families! -it

Name: _____

Sound out the word. Circle the picture that matches the word.

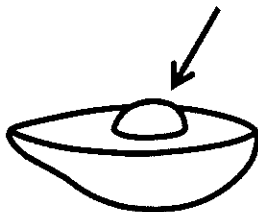

sit




kit



pit



hit



Read the sentences.

I like to sit with you.

He can see the kit.

Can you eat the pit? No!

Do you like to hit the ball?


Write your own sentence using an '-it family word' from above.

Word Families! -ap


Name: _____

Sound out the word. Circle the picture that matches the word.

map




tap



gap



cap



Read the sentences.

We will go to see the map.

I like to tap my foot!

He can see my big gap.

Can you see the gap?

Write your own sentence using an '-ap family word' from above.



Word Families!

-ip

Name: _____

Sound out the word. Circle the picture that matches the word.


dip



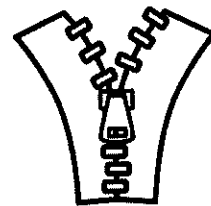

lip



rip



zip



Read the sentences.

I like to eat dip with you.

Do you see my lip?

I have a rip in my pants!

Can you zip your coat?


Write your own sentence using an '-ip family word' from above.

Word Families! -op


Name: _____

Sound out the word. Circle the picture that matches the word.

pop




cop



mop



hop



Read the sentences.

Do not pop my balloon!

The cop can help you.

I like to mop with my mom.

Do you hop on your bed?


Write your own sentence using an '-op family word' from above.

Word Families! -at


Name: _____

Sound out the word. Circle the picture that matches the word.

sat



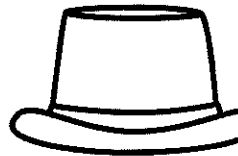
bat



rat



hat



Read the sentences.

He sat on the mat with you.

I can hit with the bat!

Can the cat get the rat?

Do you like my fun hat?

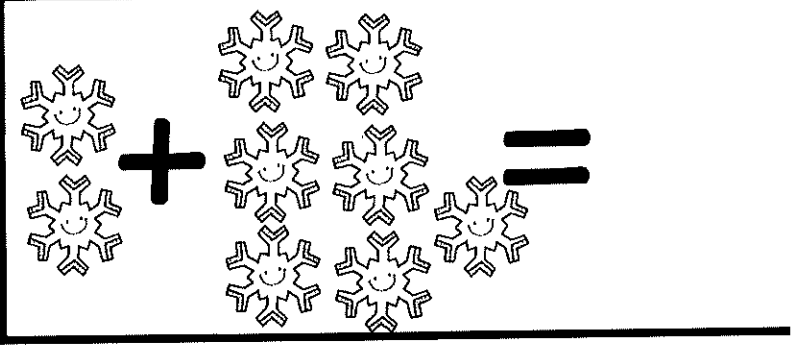
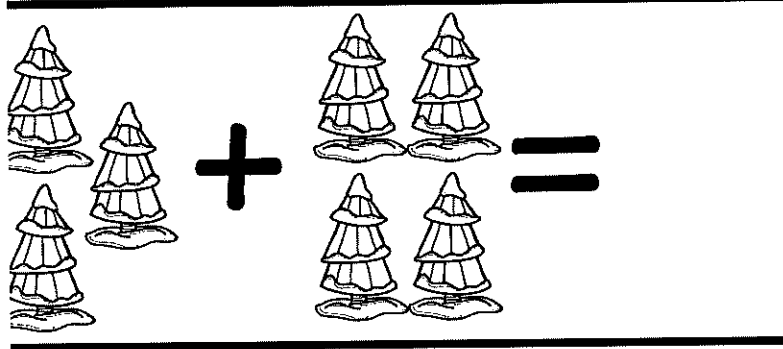
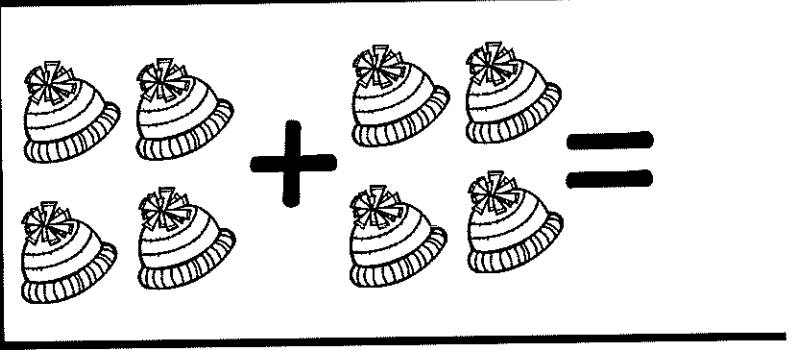

Write your own sentence using an '-at family word' from above.



Math Practice!

Name: _____

Solve the math problems.



Write numbers 1-20.

Draw a picture and solve.

Pat has 4 cars. His mom gave him 1 more. How many cars does Pat have now?



Math Practice! 2

Name: _____

Solve the math problems. You may use counters to help you.

A math problem using snow globes as counters. On the left, there are four snow globes arranged in a 2x2 grid. To their right is a plus sign, followed by two snow globes arranged vertically. To the right of these is an equals sign.

A math problem using snow globes as counters. On the left, there are three snow globes arranged in a vertical line. To their right is a plus sign, followed by two snow globes arranged horizontally. To the right of these is an equals sign.

A math problem using mittens as counters. On the left, there are five mittens arranged in a 2x3 grid with the bottom-right cell empty. To their right is a plus sign, followed by three mittens arranged in a vertical line. To the right of these is an equals sign.

A math problem using circles as counters. On the left, there are six circles arranged in a 3x2 grid. To their right is a plus sign, followed by two circles arranged vertically. To the right of these is an equals sign.

Write numbers 1-20.

Draw a picture and solve.

Pam had 5 hats. Her dad gave her 2 more. How many hats does pam have now?



Math Practice! 3

Name: _____

Solve the math problems. You may use counters to help you.

$6 \text{ trees} + 1 \text{ tree} =$

$5 \text{ circles} + 4 \text{ circles} =$

$4 \text{ hats} + 4 \text{ mittens} =$

$3 \text{ bears} + 2 \text{ bears} =$

Write numbers 1-20.

Draw a picture and solve.


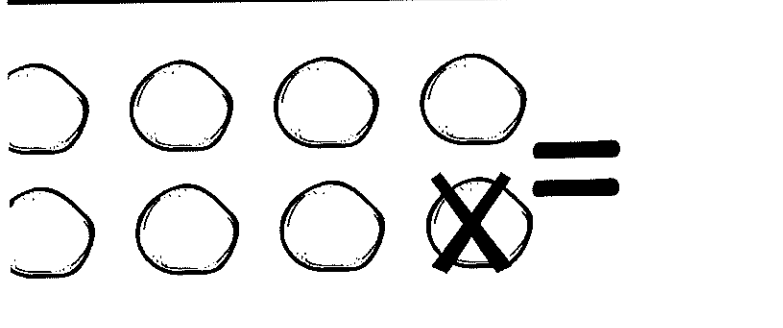


Sam ate 3 cookies. Then, Sam ate 3 more cookies. How many cookies did Sam eat altogether?



Math Practice! 4

Name: _____

Solve the math problems. You may use counters to help you.



Write numbers 1-20.

Draw a picture and solve.

Jan had 5 bouncy balls. 2 of the bouncy balls rolled away. How many bouncy balls does Jan have now?



Math Practice! 5

Name: _____

Solve the math problems. You may use counters to help you.

2 bears minus 1 bear = 1 bear

3 hats minus 2 hats = 1 hat

4 circles minus 1 circle = 3 circles

3 snow globes minus 2 snow globes = 1 snow globe


Write numbers 1-20.

Draw a picture and solve.

Jan had 5 bouncy balls. 2 of the bouncy balls rolled away. How many bouncy balls does Jan have now?

Blizzard Bag Science / Social studies

1. Get a bowl full of snow from outside, time how long it takes to melt. (OR get an ice cube out of the freezer and time how long it takes to melt.)
2. Go to kids.nationalgeographic.com . Click on "animals." Choose one or two animals to read and learn about.
3. Write a list of 5 living things and 5 non-living things that you see around your house.
4. Use the image of the American flag. Count the stars. Count the stripes. Practice saying the pledge of allegiance.



[This Photo](#) by Unknown Author is licensed under [CC BY-SA](#)